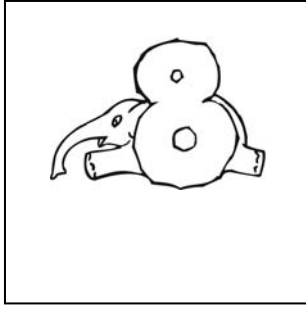




Welk cijfer probeert de olifant te verstoppen?




8 9 6 3




2 7 4 1



9 6 8 3



4 2 1 0



3 0 8 9



2 5 3 7